

1. Find the following limit. (If the limit does not exist or has an infinite limit, you should point it out. In addition, also remember the definition of definite integral) (15%)

(a) $\lim_{n \rightarrow \infty} \ln\left(\frac{1}{n} \times \frac{2}{n} \dots \times \frac{n}{n}\right)^{\frac{1}{n}}$

(b) $\lim_{x \rightarrow 0} \frac{1}{x} \int_0^x \cos(4t) dt$

(c) $\lim_{x \rightarrow 0} \cot(x) - \frac{1}{x}$

(d) $\lim_{x \rightarrow 0} \frac{\arctan(\sin(2x))}{\tan(\arcsin(3x))}$

(e) $\lim_{x \rightarrow \infty} \left(1 + \frac{1}{x}\right)^{4x}$

Ans: Notice $\lim_{x \rightarrow 0} \frac{\sin x}{x} = 1$

Theorem 5.17 (L'Hôpital's Rule)

Let f and g be functions that are differentiable on an open interval (a, b) containing c , except possibly at c itself. Assume that $g'(x) \neq 0$ for all x in (a, b) , except possibly at c itself. If the limit of $f(x)/g(x)$ as x approaches c produces the indeterminate form $0/0$, then

$$\lim_{x \rightarrow c} \frac{f(x)}{g(x)} = \lim_{x \rightarrow c} \frac{f'(x)}{g'(x)}$$

provided the limit on the right exists (or is infinite). This result also applies if the limit of $f(x)/g(x)$ as x approaches c produces any one of the indeterminate forms $\infty/\infty, (-\infty)/\infty, \infty/(-\infty)$ or $(-\infty)/(-\infty)$.

$$\begin{aligned} \text{(a)} \quad \lim_{n \rightarrow \infty} \ln\left(\frac{1}{n} \times \frac{2}{n} \dots \times \frac{n}{n}\right)^{\frac{1}{n}} &= \lim_{n \rightarrow \infty} \frac{1}{n} \sum_{i=1}^n \ln\left(\frac{i}{n}\right) = \int_0^1 \ln x \, dx \\ &= \lim_{b \rightarrow 0^+} \int_b^1 \ln x \, dx \\ &= \lim_{b \rightarrow 0^+} \left(x \ln x \Big|_b^1 - \int_b^1 dx\right) = \lim_{b \rightarrow 0^+} (-b \ln b - (1 - b)) \\ &= -1 - \lim_{b \rightarrow 0^+} \frac{\ln b}{\frac{1}{b}} = -1 - \lim_{b \rightarrow 0^+} \frac{\frac{1}{b}}{\frac{-1}{b^2}} = -1 \end{aligned}$$

Definition 4.5 (Definite integral)

If f is defined on the closed interval $[a, b]$ and the limit of Riemann sums over partitions Δ

$$\lim_{\|\Delta\| \rightarrow 0} \sum_{i=1}^n f(c_i) \Delta x_i$$

exists (as described above), then f is said to be integrable on $[a, b]$ and the limit is denoted by

$$\lim_{\|\Delta\| \rightarrow 0} \sum_{i=1}^n f(c_i) \Delta x_i = \int_a^b f(x) dx.$$

The limit is called the definite integral of f from a to b . The number a is the lower limit of integration, and the number b is the upper limit of integration.

$$(b) \lim_{x \rightarrow 0} \frac{1}{x} \int_0^x \cos(4t) dt = \lim_{x \rightarrow 0} \frac{\cos(4x)}{1} = 1$$

Theorem 3.4 (The Mean Value Theorem)

If f is continuous on the closed interval $[a, b]$ and differentiable on the open interval (a, b) , then there exists a number c in (a, b) such that

$$f'(c) = \frac{f(b) - f(a)}{b - a}.$$

Theorem 4.11 (The Second Fundamental Theorem of Calculus)

If f is continuous on an open interval I containing a , then, for every x in the interval,

$$\frac{d}{dx} \left[\int_a^x f(t) dt \right] = f(x).$$

$$(c) \lim_{x \rightarrow 0} \cot(x) - \frac{1}{x} = \lim_{x \rightarrow 0} \frac{\cos(x)}{\sin(x)} - \frac{1}{x} = \lim_{x \rightarrow 0} \frac{x \cos(x) - \sin(x)}{x \sin(x)} = \lim_{x \rightarrow 0} \frac{\cos x - x \sin x - \cos x}{\sin x + x \cos x} =$$

$$\lim_{x \rightarrow 0} \frac{-x \cos x - \sin x}{\cos x + \cos x - x \sin x} = 0 \quad (\text{Indeterminate form } \infty - \infty)$$

$$(d) \lim_{x \rightarrow 0} \frac{\arctan(\sin(2x))}{\tan(\arcsin(3x))} = \lim_{x \rightarrow 0} \frac{\frac{1}{1+\sin^2(2x)} \cos(2x) 2}{\sec^2(\arcsin(3x)) \frac{1}{\sqrt{1-(3x)^2}} 3} = \frac{2}{3}$$

$$(e) \lim_{x \rightarrow \infty} \left(1 + \frac{1}{x}\right)^{4x} = \lim_{x \rightarrow \infty} \left[\left(1 + \frac{1}{x}\right)^x\right]^4 = e^4 \quad (\text{Indeterminate form } 1^\infty, \text{ can take log})$$

Theorem 5.15 (A limit involving e)

$$\lim_{x \rightarrow \infty} \left(1 + \frac{1}{x}\right)^x = \lim_{x \rightarrow \infty} \left(\frac{x+1}{x}\right)^x = e$$

2. Find the point $a > 0$ satisfying (8%)

$$\int_1^a \frac{2}{t} dt = \int_a^{\frac{1}{8}} \frac{1}{t} dt$$

Ans:

Applying the definition of the function $\ln x$ to the equation shows that

$$2(\ln a - \ln 1) = \ln \frac{1}{8} - \ln a$$

$$3 \ln a = \ln \frac{1}{8}$$

$$a^3 = \frac{1}{8} \rightarrow a = \frac{1}{2}$$

Definition 5.1 (The natural logarithmic function)

The natural logarithmic function is defined by

$$\ln x = \int_1^x \frac{1}{t} dt, \quad x > 0.$$

The domain of the natural logarithmic function is the set of all positive real numbers.

3. Assume the inverse function of $f(x) = x^5 + 2x^3 + x - 2$ is $g(x)$, find $g'(f(1))$ (5%)

Ans:

$$g(f(x)) = x$$

$$g'(f(x))f'(x) = 1$$

$$g'(f(x)) = \frac{1}{f'(x)} = \frac{1}{5x^4 + 6x^2 + 1}$$

$$g'(f(1)) = \frac{1}{12}$$

Theorem 5.7 (The existence of an inverse function)

- 1 A function has an inverse function if and only if it is one-to-one.
- 2 If f is strictly monotonic on its entire domain, then it is one-to-one and therefore has an inverse function.

Definition 5.3 (Inverse function)

A function g is the inverse function of the function f if $f(g(x)) = x$ for each x in the domain of g and $g(f(x)) = x$ for each x in the domain of f . The function g is denoted by f^{-1} (read " f inverse").

4. Evaluate. (12%)

(a) $\int_{\sqrt{3}}^3 \frac{1}{x\sqrt{4x^2-9}} dx$?

(b) $\int \frac{2}{\sqrt{-x^2+4x}} dx$

(c) $\int \frac{5^{2x}}{1+5^{2x}} dx$

(d) $\int_{\frac{1}{4}}^{\frac{1}{2}} \frac{\arcsin(\sqrt{x})}{\sqrt{x(1-x)}} dx$

Ans: (a) $\int_{\sqrt{3}}^3 \frac{1}{x\sqrt{4x^2-9}} dx = \left[\frac{1}{3} \operatorname{arcsec} \frac{|2x|}{3} \right]_{\sqrt{3}}^3 = \frac{1}{3} \operatorname{arcsec}(2) - \frac{1}{3} \operatorname{arcsec} \frac{2\sqrt{3}}{3} = \frac{1}{3} \left(\frac{\pi}{3} \right) -$

$\frac{1}{3} \left(\frac{\pi}{6} \right) = \frac{\pi}{18}$

(b) $\int \frac{2}{\sqrt{-x^2+4x}} dx = \int \frac{2}{\sqrt{4-(x^2-4x+4)}} dx = \int \frac{2}{\sqrt{4-(x-2)^2}} dx = 2 \arcsin \left(\frac{x-2}{2} \right) + C$

Table 1: Integrals of the six basic trigonometric functions

$\int \sin u \, du = -\cos u + C$	$\int \cos u \, du = \sin u + C$
$\int \tan u \, du = -\ln \cos u + C$	$\int \cot u \, du = \ln \sin u + C$
$\int \sec u \, du = \ln \sec u + \tan u + C$	$\int \csc u \, du = -\ln \csc u + \cot u + C$

Theorem 5.19 (Integrals involving inverse trigonometric functions)

Let u be a differentiable function of x , and let $a > 0$.

1. $\int \frac{du}{\sqrt{a^2-u^2}} = \arcsin \frac{u}{a} + C$ 2. $\int \frac{du}{a^2+u^2} = \frac{1}{a} \arctan \frac{u}{a} + C$ 3. $\int \frac{du}{u\sqrt{u^2-a^2}} = \frac{1}{a} \operatorname{arcsec} \frac{|u|}{a} + C$

(c) Let $u = 1 + 5^{2x}$, $du = 2(\ln 5)5^{2x} dx$

$\int \frac{5^{2x}}{1 + 5^{2x}} dx = \frac{1}{2 \ln 5} \int \frac{1}{u} du = \frac{1}{2 \ln 5} \ln u + C = \frac{1}{2 \ln 5} \ln(1 + 5^{2x}) + C$

Theorem 5.5 (Log Rule for integration)

Let u be a differentiable function of x .

1. $\int \frac{1}{x} dx = \ln |x| + C$ 2. $\int \frac{1}{u} du = \ln |u| + C$

(d) Let $u = \arcsin(\sqrt{x})$, $\frac{du}{dx} = \frac{1}{\sqrt{1-x}} \frac{1}{2\sqrt{x}}$

$\int_{\frac{1}{4}}^{\frac{1}{2}} \frac{\arcsin(\sqrt{x})}{\sqrt{x(1-x)}} dx = \int_{\frac{\pi}{6}}^{\frac{\pi}{4}} 2u du = u^2 \Big|_{\frac{\pi}{6}}^{\frac{\pi}{4}} = \frac{5\pi^2}{144}$

5. Find the equation of the tangent line $y = \log_{10}(3x)$ at $x = 5$. (5%)

Ans:

$$y = \log_{10}(3x) = \log_{10} 3 + \frac{\ln x}{\ln 10}$$

$$y' = \frac{1}{x \ln 10} \text{ and the slope of the tangent line is } y'(5) = \frac{1}{5 \ln 10}$$

Therefore, the tangent line is $y = \frac{1}{5 \ln 10}(x - 5) + \log_{10} 15$

Theorem 5.13 (Derivatives for bases other than e)

Let a be a positive real number ($a \neq 1$) and let u be a differentiable function of x .

$$1. \frac{d}{dx} [a^x] = (\ln a)a^x$$

$$2. \frac{d}{dx} [a^u] = (\ln a)a^u \frac{du}{dx}$$

$$3. \frac{d}{dx} [\log_a x] = \frac{1}{(\ln a)x}$$

$$4. \frac{d}{dx} [\log_a u] = \frac{1}{(\ln a)u} \frac{du}{dx}$$

6. Evaluate (16%)

(a) $\int (\ln x)^3 dx$

(b) $\int e^x \cos x dx$

(c) $\int_{-\pi}^{\pi} \sin(mx) \cos(nx) dx$, where m and n are positive integers

(d) $\int_0^{\ln 4} \frac{e^x}{\sqrt{e^{2x}+9}} dx$

Ans:

Theorem 8.1 (Integration by Parts)

If u and v are functions of x and have continuous derivatives, then

$$\int u dv = uv - \int v du = uv - \int vu' dx.$$

(a)

Let $u = (\ln x)^3$, $dv = dx \rightarrow du = 3(\ln x)^2 \frac{1}{x} dx$, $v = x$

$$\int (\ln x)^3 dx = x(\ln x)^3 - 3 \int (\ln x)^2 dx$$

Let $u = (\ln x)^2$, $dv = dx \rightarrow du = 2 \ln x \frac{1}{x} dx$, $v = x$

$$\int (\ln x)^2 dx = x(\ln x)^2 - 2 \int \ln x dx$$

Let $u = \ln x$, $dv = dx \rightarrow du = \frac{1}{x} dx$, $v = x$

$$\int \ln x = x \ln x - \int dx = x \ln x - x + C$$

$$\begin{aligned}\int (\ln x)^3 dx &= x(\ln x)^3 - 3 \int (\ln x)^2 dx \\ &= x(\ln x)^3 - 3 \left(x(\ln x)^2 - 2 \int \ln x dx \right) \\ &= x(\ln x)^3 - 3(x(\ln x)^2 - 2(x \ln x - x + C)) \\ &= x(\ln x)^3 - 3x(\ln x)^2 + 6x \ln x - 6x + C'\end{aligned}$$

(b)

Let $u = \cos x$, $dv = e^x dx \rightarrow du = -\sin x dx$, $v = e^x$

$$\int e^x \cos x dx = e^x \cos x + \int e^x \sin x dx$$

Let $u = \sin x$, $dv = e^x dx \rightarrow du = \cos x dx$, $v = e^x$

$$\int e^x \cos x dx = e^x \cos x + \int e^x \sin x dx = e^x \cos x + \left(e^x \sin x - \int e^x \cos x dx \right)$$

$$\int e^x \cos x dx = \frac{1}{2}(e^x \cos x + e^x \sin x) + C$$

(c)

$\int_{-\pi}^{\pi} \sin(mx) \cos(nx) dx$, where m and n are positive integers

If $m \neq n$, $\int_{-\pi}^{\pi} \sin(mx) \cos(nx) dx = \frac{1}{2} \int_{-\pi}^{\pi} \sin((m+n)x) + \sin((m-n)x) dx = 0$ since $\sin x$ is an odd function

If $m = n$, $\int_{-\pi}^{\pi} \sin(mx) \cos(nx) dx = \frac{1}{2} \int_{-\pi}^{\pi} \sin(2mx) dx = 0$

$$\sin mx \cos nx = \frac{1}{2}(\sin[(m-n)x] + \sin[(m+n)x])$$

$$\sin^2 x = \frac{1 - \cos 2x}{2} \quad \text{and} \quad \cos^2 x = \frac{1 + \cos 2x}{2}$$

$$(d) \int_0^{\ln 4} \frac{e^x}{\sqrt{e^{2x}+9}} dx$$

(Let $u = e^x, du = e^x dx$)

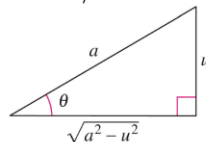
$$= \int_1^4 \frac{du}{\sqrt{u^2+9}}$$

(Let $u = 3\tan\theta, du = 3\sec^2\theta d\theta$)

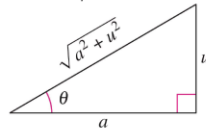
$$= \int_{\arctan(\frac{1}{3})}^{\arctan(\frac{4}{3})} \sec\theta d\theta = \ln|\sec\theta + \tan\theta| \Big|_{\arctan(\frac{1}{3})}^{\arctan(\frac{4}{3})} = \ln\left(\frac{5}{3} + \frac{4}{3}\right) - \ln\left(\frac{\sqrt{10}+1}{3}\right)$$

$$= 2\ln 3 - \ln(\sqrt{10}+1)$$

For integrals involving $\sqrt{a^2 - u^2}$, let $u = a \sin \theta$. Then $\sqrt{a^2 - u^2} = a \cos \theta$, where $-\pi/2 \leq \theta \leq \pi/2$.

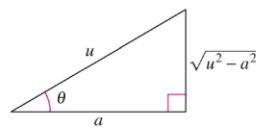


For integrals involving $\sqrt{a^2 + u^2}$, let $u = a \tan \theta$. Then $\sqrt{a^2 + u^2} = a \sec \theta$, where $-\pi/2 \leq \theta \leq \pi/2$.



For integrals involving $\sqrt{u^2 - a^2}$, let $u = a \sec \theta$.

$$\text{Then } \sqrt{u^2 - a^2} = \begin{cases} a \tan \theta & \text{if } u > a, \text{ where } 0 \leq \theta < \pi/2 \\ -a \tan \theta, & \text{if } u < -a, \text{ where } \pi/2 < \theta \leq \pi. \end{cases}$$



7. Evaluate (16%)

$$(a) \int \frac{\sec^2(x)}{(\tan x)(\tan x + 1)} dx$$

$$(b) \int \frac{x^4 - 2x^2 + 4x + 1}{x^3 - x^2 - x + 1} dx$$

$$(c) \int_{-\infty}^0 x e^x dx$$

$$(d) \int_0^3 \frac{1}{\sqrt[3]{x-1}} dx$$

Ans:

(a) Let $u = \tan x, du = \sec^2(x)dx$

$$\int \frac{\sec^2(x)}{(\tan x)(\tan x + 1)} dx = \int \frac{1}{(u)(u + 1)} du$$

$$\frac{1}{(u)(u + 1)} = \frac{A}{u} + \frac{B}{u + 1},$$

$$1 = A(u + 1) + Bu$$

When $u = 0, A = 1$

When $u = 1, B = -1$

$$\int \frac{\sec^2(x)}{(\tan x)(\tan x + 1)} dx = \int \frac{1}{(u)(u + 1)} du = \int \frac{1}{u} - \frac{1}{u + 1} du$$

$$= \ln|u| - \ln|u + 1| + C = \ln \left| \frac{u}{u + 1} \right| + C$$

$$= \ln \left| \frac{\tan x}{\tan x + 1} \right| + C$$

(b)

$$\frac{x^4 - 2x^2 + 4x + 1}{x^3 - x^2 - x + 1} = x + 1 + \frac{4x}{x^3 - x^2 - x + 1}$$

$$\frac{4x}{x^3 - x^2 - x + 1} = \frac{4x}{(x - 1)^2(x + 1)} = \frac{A}{x - 1} + \frac{B}{(x - 1)^2} + \frac{C}{(x + 1)}$$

$$4x = A(x - 1)(x + 1) + B(x + 1) + C(x - 1)^2$$

$$A = 1, B = 2, C = -1$$

$$\int \frac{x^4 - 2x^2 + 4x + 1}{x^3 - x^2 - x + 1} dx = \int \left(x + 1 + \frac{1}{x - 1} + \frac{2}{(x - 1)^2} + \frac{-1}{(x + 1)} \right) dx$$

$$= \frac{1}{2}x^2 + x + \ln|x - 1| - \frac{2}{x - 1} - \ln|x + 1| + C$$

- ③ Linear factors: For each factor of the form $(px + q)^m$, the partial fraction decomposition must include the following sum of m fractions.

$$\frac{A_1}{(px + q)} + \frac{A_2}{(px + q)^2} + \cdots + \frac{A_m}{(px + q)^m}$$

- ④ Quadratic factors: For each factor of the form $(ax^2 + bx + c)^n$, the partial fraction decomposition must include the following sum of n fractions.

$$\frac{B_1x + C_1}{ax^2 + bx + c} + \frac{B_2x + C_2}{(ax^2 + bx + c)^2} + \cdots + \frac{B_nx + C_n}{(ax^2 + bx + c)^n}$$

(c)

$$\begin{aligned}\int_{-\infty}^0 x e^x dx &= \lim_{a \rightarrow -\infty} \int_a^0 x e^x dx = \lim_{a \rightarrow -\infty} ((x e^x)|_a^0 - \int_a^0 e^x dx) \\ &= \lim_{a \rightarrow -\infty} (-a e^a - 1 + e^a) = - \lim_{a \rightarrow -\infty} \left(\frac{a}{e^{-a}} \right) - 1 \\ &= - \lim_{a \rightarrow -\infty} \left(\frac{1}{-e^{-a}} \right) - 1 = \lim_{a \rightarrow -\infty} (e^a) - 1 = -1\end{aligned}$$

(d)

$$\begin{aligned}\int_0^3 \frac{1}{\sqrt[3]{x-1}} dx &= \int_0^1 \frac{1}{\sqrt[3]{x-1}} dx + \int_1^3 \frac{1}{\sqrt[3]{x-1}} dx \\ &= \lim_{b \rightarrow 1^-} \int_0^b \frac{1}{\sqrt[3]{x-1}} dx + \lim_{c \rightarrow 1^+} \int_c^3 \frac{1}{\sqrt[3]{x-1}} dx \\ &= \lim_{b \rightarrow 1^-} \frac{3}{2} (x-1)^{\frac{2}{3}} \Big|_0^b + \lim_{c \rightarrow 1^+} \frac{3}{2} (x-1)^{\frac{2}{3}} \Big|_c^3 = \frac{-3}{2} + \frac{3\sqrt[3]{4}}{2}\end{aligned}$$

Definition 8.1 (Improper integrals with infinite integration limits)

- 1 If f is continuous on the interval $[a, \infty)$, then

$$\int_a^{\infty} f(x) dx = \lim_{b \rightarrow \infty} \int_a^b f(x) dx.$$

- 2 If f is continuous on the interval $(-\infty, b]$, then

$$\int_{-\infty}^b f(x) dx = \lim_{a \rightarrow -\infty} \int_a^b f(x) dx.$$

- 3 If f is continuous on the interval $(-\infty, \infty)$, then

$$\int_{-\infty}^{\infty} f(x) dx = \int_{-\infty}^c f(x) dx + \int_c^{\infty} f(x) dx$$

where c is any real number.

Definition 8.2 (Improper integrals with infinite discontinuities)

- 1 If f is continuous on the interval $[a, b)$ and has an infinite discontinuity at b , then

$$\int_a^b f(x) dx = \lim_{c \rightarrow b^-} \int_a^c f(x) dx.$$

- 2 If f is continuous on the interval $(a, b]$ and has an infinite discontinuity at a , then

$$\int_a^b f(x) dx = \lim_{c \rightarrow a^+} \int_c^b f(x) dx.$$

- 3 If f is continuous on the interval $[a, b]$, except for some c in (a, b) at which f has an infinite discontinuity, then

$$\int_a^b f(x) dx = \int_a^c f(x) dx + \int_c^b f(x) dx.$$

8. Determine whether the following integral diverges or converges (9%)

(a) $\int_0^1 \frac{1}{\sqrt[7]{x}} dx$

(b) $\int_1^\infty \frac{\sin^2 x}{x^2} dx$

(c) $\int_1^\infty \frac{1}{\sqrt{x}} dx$

Ans: (a) If $p = 1$, $\int_0^1 \frac{1}{x^p} dx = \int_0^1 \frac{1}{x} dx = \lim_{a \rightarrow 0^+} \ln x \Big|_a^1 = \infty$ diverges

If $p \neq 1$, $\int_0^1 \frac{1}{x^p} dx = \lim_{a \rightarrow 0^+} \frac{x^{1-p}}{1-p} \Big|_a^1 = \lim_{a \rightarrow 0^+} \left(\frac{1}{1-p} - \frac{a^{1-p}}{1-p} \right) = \frac{1}{1-p} - \frac{1}{1-p} \lim_{a \rightarrow 0^+} a^{1-p}$

Which converges to $\frac{1}{1-p}$ if $1 - p > 0 \leftrightarrow p < 1$

Therefore, $\int_0^1 \frac{1}{\sqrt[7]{x}} dx$ converges

(b) Since $\frac{1}{x^2} \geq \frac{\sin^2 x}{x^2} \geq 0$ on $[1, \infty)$ and $\int_1^\infty \frac{1}{x^2} dx$ is convergent.

$\int_1^\infty \frac{\sin^2 x}{x^2} dx$ is convergent by the comparison test

Theorem 8.7 (A special type of improper integral)

$$\int_1^\infty \frac{dx}{x^p} = \begin{cases} \frac{1}{p-1}, & \text{if } p > 1 \\ \text{diverges,} & \text{if } p \leq 1 \end{cases}$$

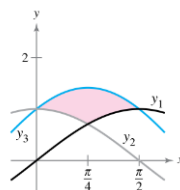
(c) $\int_1^\infty \frac{1}{\sqrt{x}} dx$ is divergent

Theorem 8.8 (Comparison Test for Improper Integrals)

Suppose the function f and g are continuous and $0 \leq g(x) \leq f(x)$ on the interval $[a, \infty)$. It can be shown that if $\int_a^\infty f(x) dx$ converges, then $\int_a^\infty g(x) dx$ also converges, and if $\int_a^\infty g(x) dx$ diverges, then $\int_a^\infty f(x) dx$ also diverges.

9. Find the area of the given region bounded by the graph y_1, y_2 and y_3 (6%)

$$y_1 = \sin x, y_2 = \cos x, y_3 = \cos x + \sin x$$



Ans:

$$\begin{aligned}
 A &= \int_0^{\frac{\pi}{4}} (y_3 - y_2) dx + \int_{\frac{\pi}{4}}^{\frac{\pi}{2}} (y_3 - y_1) dx = \int_0^{\frac{\pi}{4}} \sin x \, dx + \int_{\frac{\pi}{4}}^{\frac{\pi}{2}} \cos x \, dx \\
 &= -\cos x \Big|_0^{\frac{\pi}{4}} + \sin x \Big|_{\frac{\pi}{4}}^{\frac{\pi}{2}} = 2 - \sqrt{2}
 \end{aligned}$$

Area of a region between two curves

If f and g are continuous on $[a, b]$ and $g(x) \leq f(x)$ for all x in $[a, b]$, then the area of the region bounded by the graphs of f and g and the vertical lines $x = a$ and $x = b$ is

$$A = \int_a^b [f(x) - g(x)] dx.$$

10. Find the volume of the solid generated by revolving the region bounded by the graph of $f(x) = e^{-x}$ and the x-axis ($0 \leq x \leq \ln 2$) about the line $y = -1$. (8%)

Ans:

$$\begin{aligned}
 V &= \pi \int_0^{\ln 2} (e^{-x} + 1)^2 dx - \pi \int_0^{\ln 2} 1^2 dx = \pi \int_0^{\ln 2} e^{-2x} + 2e^{-x} \, dx \\
 &= \pi \left(\frac{e^{-2x}}{-2} - 2e^{-x} \right) \Big|_0^{\ln 2} = \frac{11}{8} \pi
 \end{aligned}$$

The Disk Method

To find the volume of a solid of revolution with the Disk Method, use one of the following, as shown in Figure 12.

Horizontal axis of revolution

$$\text{Volume} = V = \pi \int_a^b [R(x)]^2 dx$$

Vertical axis of revolution

$$\text{Volume} = V = \pi \int_c^d [R(y)]^2 dy$$

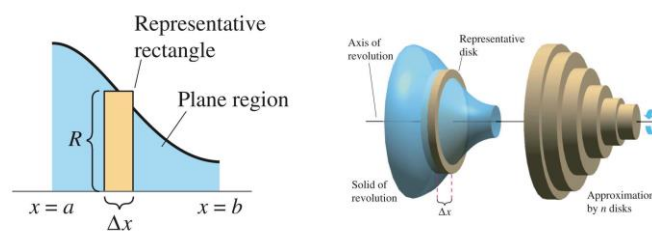


Figure 11: Disk Method.